

Animal Roundup


Use multiplication to show equal groups.
The **x** sign means to multiply.

How many groups? 2


How many in each group? 3

How many in all? 6

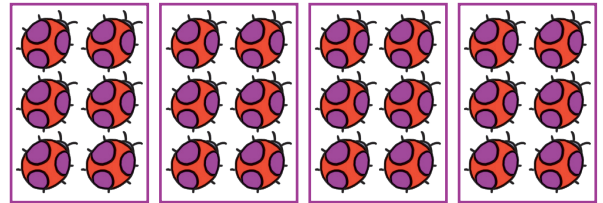
$$\underline{2} \times \underline{3} = \underline{6}$$



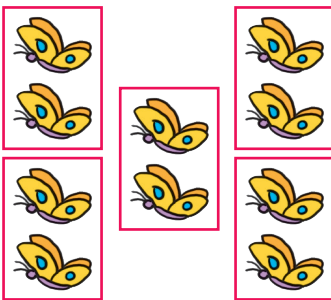
Write a multiplication sentence to find how many.




1. $\underline{\quad} \times \underline{\quad} = \underline{\quad}$




2. $\underline{\quad} \times \underline{\quad} = \underline{\quad}$



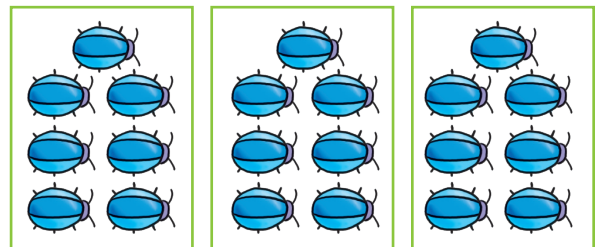
3. $\underline{\quad} \times \underline{\quad} = \underline{\quad}$



4. $\underline{\quad} \times \underline{\quad} = \underline{\quad}$



5. $\underline{\quad} \times \underline{\quad} = \underline{\quad}$



6. $\underline{\quad} \times \underline{\quad} = \underline{\quad}$