


LITTLE BUGS

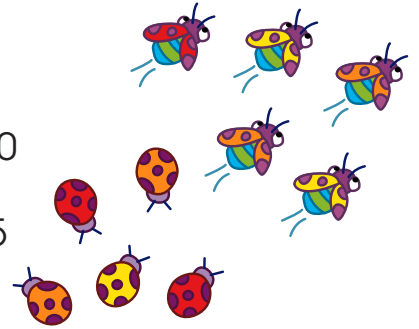


Circle the correct question and number sentence for each story problem.

1. **10** ladybugs were in the garden.
5 ladybugs left the garden.

How many ladybugs were there in all? $5 + 5 = 10$

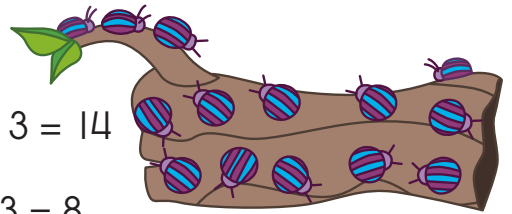
How many ladybugs were left? $10 - 5 = 5$



2. **11** beetles were on a log.
3 more beetles came along.

How many beetles are there in all? $11 + 3 = 14$


How many beetles were left? $11 - 3 = 8$



3. **8** ants were on a watermelon.
7 more ants were on the ground.

How many ants were there in all? $8 + 7 = 15$

How many ants were left? $8 - 7 = 1$



4. **12** bees were at a hive.
3 bees flew away.

How many bees were there in all? $12 + 3 = 15$

How many bees were left? $12 - 3 = 9$

